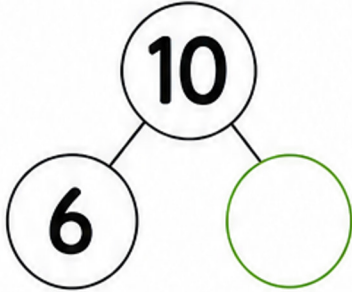


Number Bonds

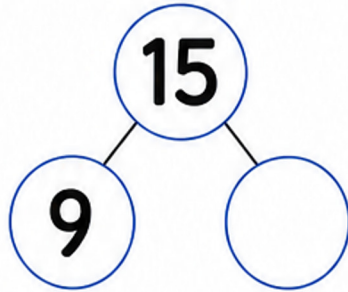
TASK CARDS



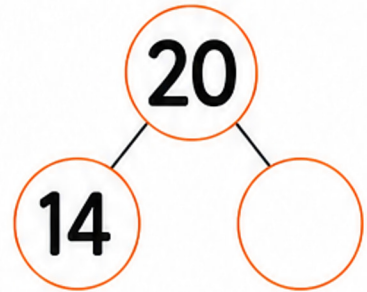
1 Find the missing part.



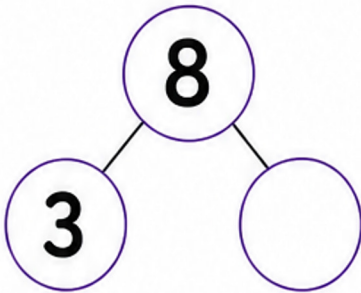
2 Find the missing part.



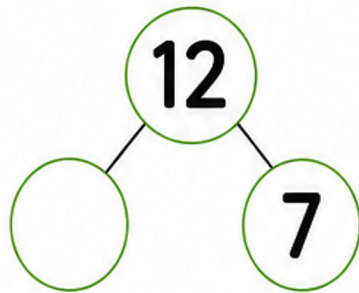
3 Find the missing part.



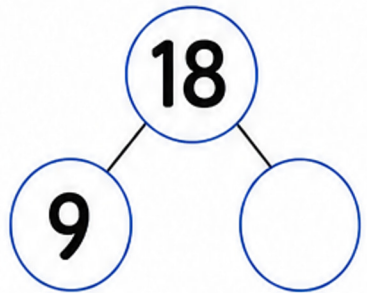
4 Complete the number bond.



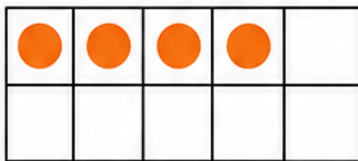
5 Complete the number bond.



6 Complete the number bond.

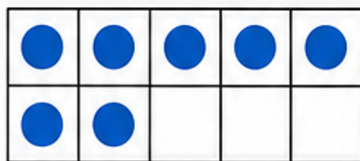


7 Use the ten frame to find the missing part.



$$4 + \square = 10$$

8 Use the ten frame to find the missing part.



$$7 + \square = 10$$

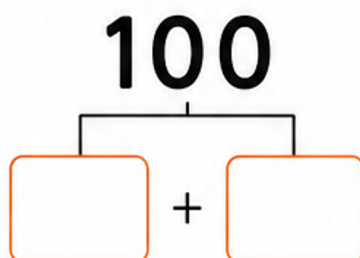
9 Find all the number bonds for 10.

$$\begin{aligned} 0 + 10 &= 10 \\ 1 + \square &= 10 \\ 2 + \square &= 10 \\ 3 + \square &= 10 \\ 4 + \square &= 10 \\ 5 + \square &= 10 \end{aligned}$$

10 Find all the number bonds for 20.

$$\begin{aligned} 0 + 20 &= 20 \\ 1 + \square &= 20 \\ 2 + \square &= 20 \\ 3 + \square &= 20 \\ 4 + \square &= 20 \\ 5 + \square &= 20 \end{aligned}$$

11 Find the two numbers that make 100.



12 Find the two numbers that make 1000.

