

SYMMETRY

MIRROR TEMPLATES

WHAT IS SYMMETRY?



A shape is the same on both sides of a mirror line.

MIRROR LINE



The mirror line shows where the reflection happens.

YOUR JOB

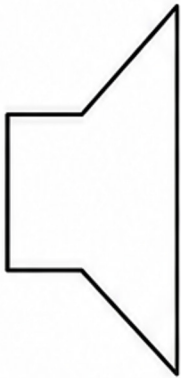


Complete the other half of each shape to make a symmetric picture.

NAME: _____

DATE: _____

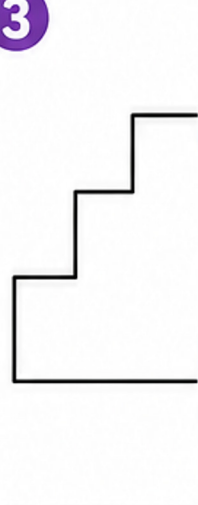
1



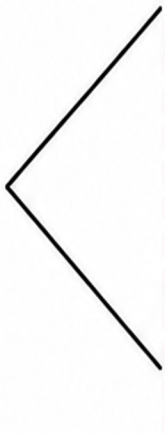
2



3



4



5



6



VOCABULARY

SYMMETRY



Balanced and the same on both sides.

MIRROR LINE



The line of reflection.

REFLECTION



The flipped copy across the mirror line.

EQUAL



The same size and shape.

CHECK YOUR WORK!



Does your shape look the same on both sides of the mirror line?