

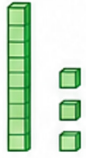
ROUNDING NUMBERS

TASK CARDS

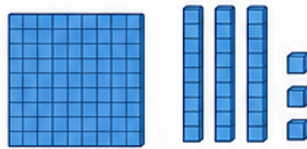
Read each card. Round the number as shown.




1 Round 37
to the nearest 10.



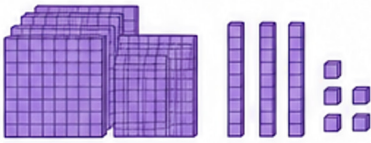
2 Round 152
to the nearest 10.



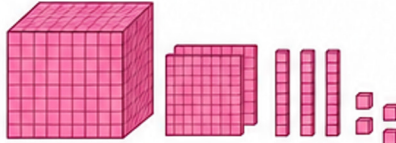
3 Round 639
to the nearest 100.



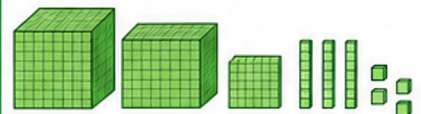
4 Round 2,374
to the nearest 100.



5 Round 7,826
to the nearest 1,000.



6 Round 45,672
to the nearest 10,000.



7 Round 0.73
to the nearest tenth.



8 Round 3.248
to the nearest hundredth.



9 Round 12.75
to the nearest whole number.



10 Round 9,543
to the nearest 1,000.

- 9,000
- 9,500
- 10,000
- 10,500

11 Round 2,689
to the nearest 100.

- 2,600
- 2,700
- 2,690
- 2,800

12 Round 76.38
to the nearest tenth.

- 76.3
- 76.4
- 76.30
- 76.38

Answer each card on paper or in your notebook.