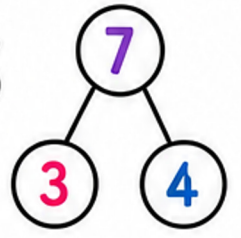


Number Bonds

Exit Ticket Slips

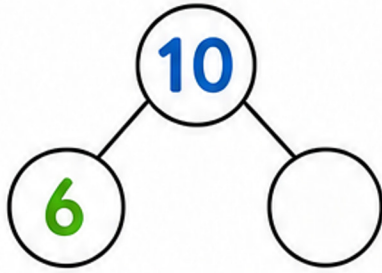


Name: _____

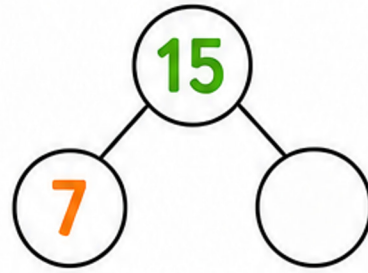
Date: _____



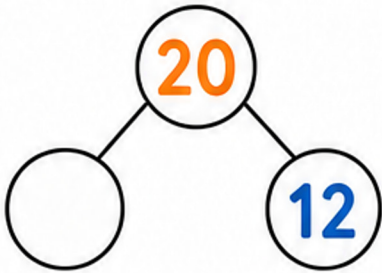
1 Find the missing number(s).



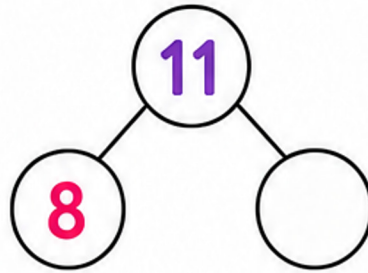
2 Find the missing number(s).



3 Find the missing number(s).



4 Find the missing number(s).



5 Find the missing number(s).

$$9 + \square = 16$$

$$\square + 7 = 16$$

6 Find the missing number(s).

$$14 + \square = 20$$

$$\square + 6 = 20$$



7 Find the missing number(s).

$$\square + \square = 18$$

List 3 different number bonds.

_____, _____, _____

8 Find the missing number(s).

$$\square + \square = 100$$

List 3 different number bonds.

_____, _____, _____